

---

## Evaluating Logarithms

ID: 9533

Time required  
30 minutes

---

### Activity Overview

*In Problem 1, students explore the logarithm (base 10) function and compare the functions  $y = 10^x$  and  $y = \log 10^x$  first by a table of values and then by a graph. Negative and fractional values of the function are highlighted. Then, students use the Calculator application to evaluate logarithms with base 10 and visually connect logarithm expressions with their equivalent exponential equations. In Problem 2, students explore logarithms with other bases via tables, graphs, the calculator application and the change of base formula.*

### Topic: Exponential & Logarithmic Functions & Equations

- Evaluate the logarithmic function  $f(x) = \log_a(x)$  for any value of  $x$ .
  - Graph exponential functions of the form  $f(x) = ab^x$  where  $a$  and  $b$  are positive real numbers and  $b \neq 1$ .
  - Express the inverse of a given exponential function as a logarithmic function and graph it.
- 

### Teacher Preparation and Notes

- *This activity is appropriate for students in Algebra 2 or as a review for Precalculus. Prior to beginning this activity, students should be familiar with the definition of a logarithm and have experience with simple exponential equations of the form  $a^x = b$ , as well as the exponent rules.*
- *This activity requires students to graph functions, add a function table to a graph, and drag items on a Graphs & Geometry screen. If students have not had experience with these functions of the handheld, extra time should be taken to explain them.*
- *Notes for using the TI-Nspire™ Navigator™ System are included throughout the activity. The use of the Navigator System is not necessary for completion of this activity.*
- **To download the student and solution TI-Nspire documents (.tns files), go to [education.ti.com/exchange](http://education.ti.com/exchange) and enter “9533” in the keyword search box.**

### Associated Materials

- *EvaluatingLogarithms\_Student.doc*
- *EvaluatingLogarithms.tns*
- *EvaluatingLogarithms\_Soln.tns*

### Suggested Related Activities

*To download any activity listed, go to [education.ti.com/exchange](http://education.ti.com/exchange) and enter the number in the keyword search box.*

- *Properties of Logarithms (TI-Nspire technology) — 9607*

**Problem 1 – Logarithms base 10**

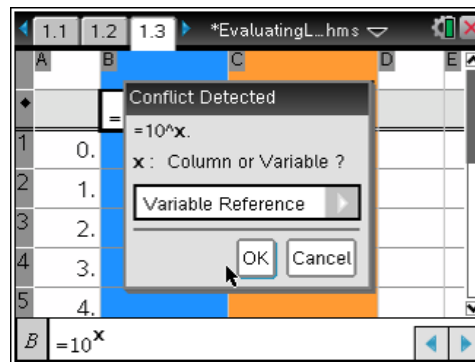
To begin the activity, students first build a function table for the functions  $y = 10^x$  and  $y = \log(10^x)$  using Columns B and C on page 1.3.

Also, be sure to emphasize the importance of having student select **Variable Reference** in the subsequent dialog box.

**TI-Nspire Navigator Opportunity: Screen Capture**  
**See Note 1 at the end of this lesson.**

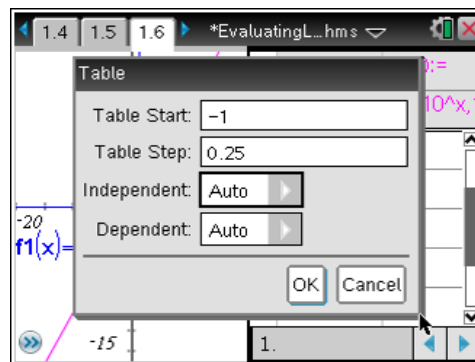
	B	C
	=10 <sup>x</sup>	=log(10 <sup>x</sup> )
1	0.	0.
2	1.	1.
3	2.	2.
4	3.	3.
5	4.	4.

Page 1.4 asks several questions about the table. Students should realize that the numbers in Column A and Column C are the same (leading them to recognize that  $\log(10^x) = x$ ).



Page 1.5 prompts students to graph these two equations on page 1.6. They should see that the graph of  $y = \log(10^x)$  appears to be the same as the graph of  $y = x$ . Students may need to adjust the window settings to zoom in on the graphs.

**TI-Nspire Navigator Opportunity: Quick Poll**  
**See Note 2 at the end of this lesson.**



Next, students add a function table to the graph. To get a closer look at the log function, in particular how it behaves with negative and non-integer values, students should change the table settings so that the table starts with a whole number less than 0 (such as -2) and the table step is between 0 and 1 (such as 0.25). They will see that the relationship between the columns for  $x$  and  $f_2(x)$  still holds.

Note: Due to the compact nature of the contents of the table's three columns in this problem, you may need to advise that the students position the cursor within the cells to reveal the complete decimal values of  $x$  and  $f_2(x)$ .

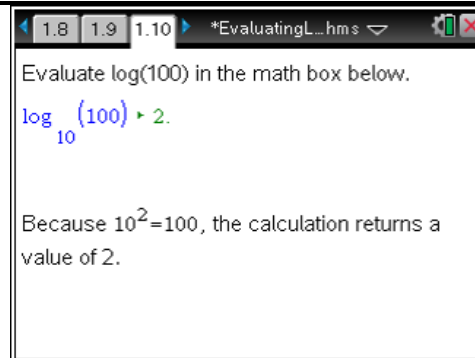
Take a close look at the values in the three columns.

1. What is the value of $10^3$ ?	2. What is the value of $\log 10^3$ ?
Student: type response here	Student: type response here

**TI-Nspire Navigator Opportunity: Screen Capture**

See Note 3 at the end of this lesson.

Page 1.10 prompts students to evaluate a  $\log_{10}(x)$  expression in the math box. To evaluate  $\log_{10}100$ , students should enter **log(100)** with parentheses. The handheld will automatically add the base of the log to the expression. Remind students that the symbol log without a subscript means  $\log_{10}$ .



As a review of the meaning of  $\log_{10}$ , students are to match log expressions with their equivalent exponential equations. After they have matched all the expressions on page 1.13, they use the **Calculate** tool from the Actions menu to evaluate each log expression.

$\log_{10}(10)$	1	$10^x=10$
$\log_{10}(0.01)$	-2	$10^x=0.01$
$\log_{10}(250)$	2.4	$10^x=250$
$\log_{10}(2)$	0.301	$10^x=2$
$\log_{10}(1000)$	3	$10^x=1000$

Correct Order

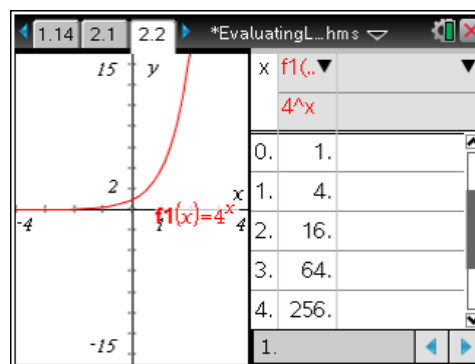
Finally, students are reminded that numbers other than powers of 10 have logarithms base 10. They are given an example of such a logarithm and prompted to evaluate the log base 10 of other numbers that are not powers of 10.

**TI-Nspire Navigator Opportunity: Screen Capture**

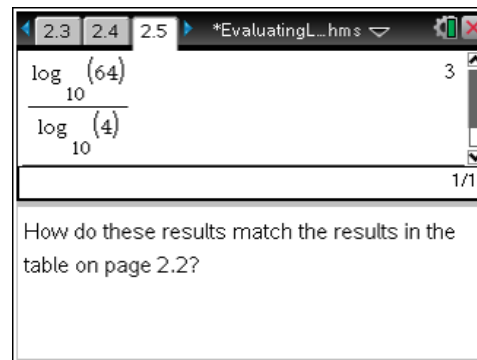
See Note 4 at the end of this lesson.

**Problem 2 – Logarithms with other bases**

Students begin this problem by graphing and viewing a table of values for the equation  $y = \log_4 x$ . Students may need to adjust the window settings to view the graph.



The change of base formula is introduced on page 2.4. Students use it to evaluate  $\log_4(64)$  on page 2.5. An alternative way to calculate  $\log_4(64)$  directly using the Calculator template is introduced on page 2.6. (To access the log template, press  $\left[\frac{\log(\square)}{\log(\square)}\right]$ , and choose it from the menu.)



Students are again directed to match log expressions with their equivalent exponential equations on page 2.7. After they have matched all the expressions on page 2.8, they use the **Calculate** tool to evaluate each log expression.

A screenshot of a TI-Nspire calculator window titled '\*EvaluatingL...hms'. It displays a table with two columns. The first column contains log expressions and their values, and the second column contains equivalent exponential equations. The rows are:  $\log_2(128) = 7$  and  $2^x = 128$ ;  $\log_4\left(\frac{1}{64}\right) = -3$  and  $4^x = \frac{1}{64}$ ;  $\log_4(16) = 2$  and  $4^x = 16$ ;  $\log_4(2) = 0.5$  and  $4^x = 2$ ;  $\log_{64}(100) = 1.11$  and  $64^x = 100$ .

$\log_2(128) = 7$	$2^x = 128$
$\log_4\left(\frac{1}{64}\right) = -3$	$4^x = \frac{1}{64}$
$\log_4(16) = 2$	$4^x = 16$
$\log_4(2) = 0.5$	$4^x = 2$
$\log_{64}(100) = 1.11$	$64^x = 100$

Correct Order

**TI-Nspire Navigator Opportunity: Screen Capture**

See Note 5 at the end of this lesson.

**TI-Nspire Navigator Opportunities****Note 1****Problem 1, *Screen Capture***

This would be a good place to do a screen capture to verify students have entered the equations using the correct syntax into the formula cells and that they selected Variable Reference.

**Note 2****Problem 1, *Quick Poll***

You may want to use Quick Poll to determine if the responses to Questions 1 and 2 are correct.

**Note 3****Problem 1, *Screen Capture***

It may be helpful to look at the students' screens to verify they are making the appropriate adjustments to their Table Setup.

**Note 4****Problem 1, *Screen Capture***

This would be a good place to do a screen capture to verify students have reordered the logarithm expressions in the correct locations to match the exponential equations to the right.

**Note 5****Problem 2, *Screen Capture***

This would be a good place to do a screen capture to verify students have reordered the logarithm expressions in the correct locations to match the exponential equations to the right.