

Linear Functions

ACMNA215 – Assessment



Name:



Assessment



Navigator



Student



30 min

Score:

Teacher:

Q.1. The straight line equation $y = 2x + 3$ has a gradient of:

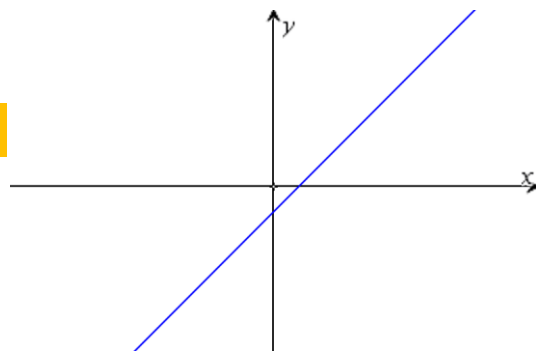
- a) 1 b) 2 c) 3 d) 4 e) 5

Q.2. The straight line equation $y = 4x - 2$ has a y intercept:

- a) (0, 2) b) (0, -2) c) (4, 0) d) (-2, 0) e) (2, 0)

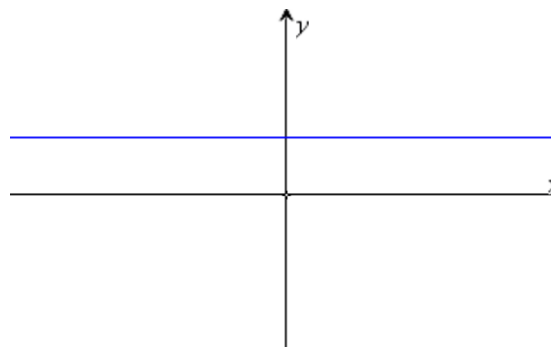
Q.3. The equation for the graph opposite could be:

- a) $y = x$ b) $y = -x$
c) $y = -x + 1$ d) $y = x - 1$
e) $y = x + 1$



Q.4. The equation for the graph opposite could be:

- a) $y = x$ b) $y = -x$
c) $y = 2$ d) $y = -2$
e) $y = x + 1$



Q.5. The straight line equation $2x + 3y = 6$ has a y intercept:

- a) (0, 1) b) (0, 2) c) (0, 3) d) (2, 0) e) (0, 6)

Q.6. The straight line equation $4x + 3y = 12$ has an x intercept:

- a) (1, 0) b) (2, 0) c) (3, 0) d) (12, 0) e) (0, 3)

Q.7. The gradient of the line equation connecting points (2, 3) and (4, 7) is:

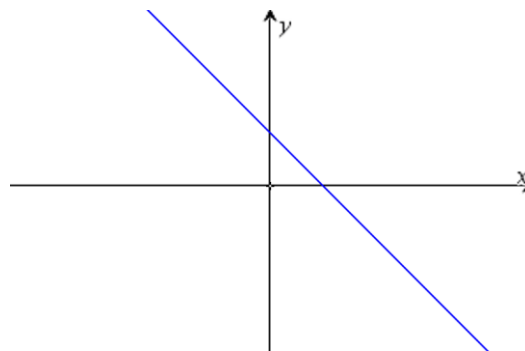
- a) -2 b) -1 c) 1 d) 2 e) 4

Q.8. The straight line equation passing through the points: (2, 5) and (2, 8) is:

- a) $x = 2$ b) $y = 2$ c) $y = 3x - 1$ d) $y = 3x + 1$ e) $y = 3x$

Q.9. The equation for the graph opposite could be:

- a) $y = 2 - x$ b) $y = x - 2$
c) $y = -x - 2$ d) $y = -2x$
e) $x = -2y$



Q.10. Which one of the following would not produce a straight line graph?

- a) $y = 2x$ b) $y = 3$ c) $x = -2$ d) $2x + 4y = 0$ e) $xy = 1$